

# PROCEDURAL

## 2EP14

First name \_\_\_\_\_

Last name \_\_\_\_\_

School \_\_\_\_\_

Class \_\_\_\_\_

Date of birth ○○ ○○ ○○○○

Date of test ○○ 05 2014

Total score  (maximum 28)



117557



Llywodraeth Cymru  
Welsh Government

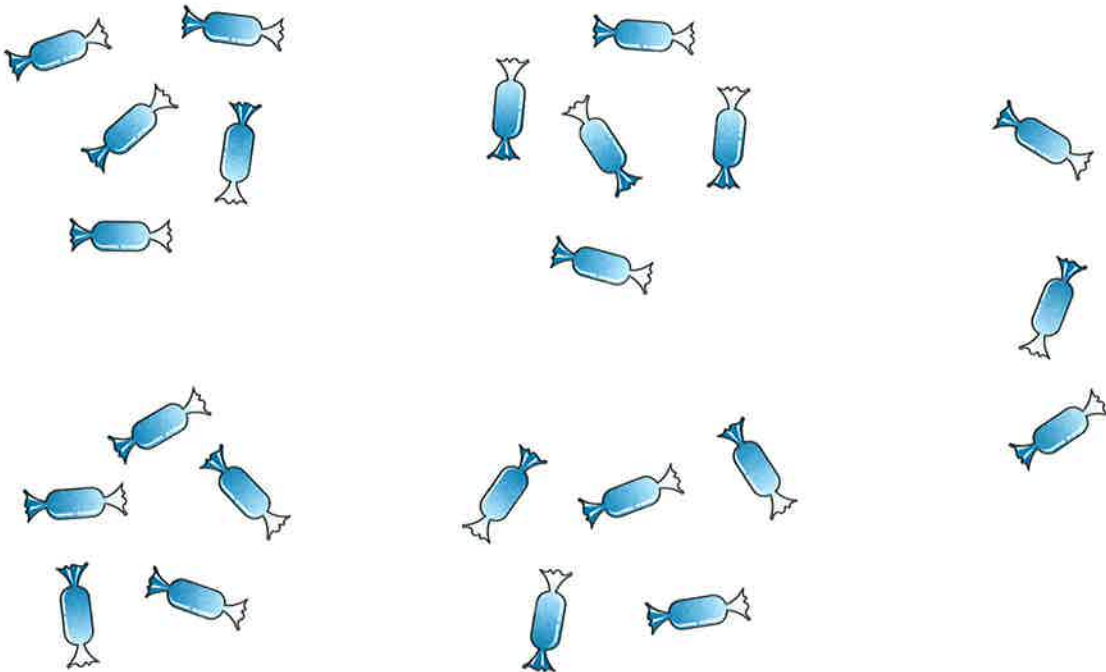
1



How many socks?

socks

1m



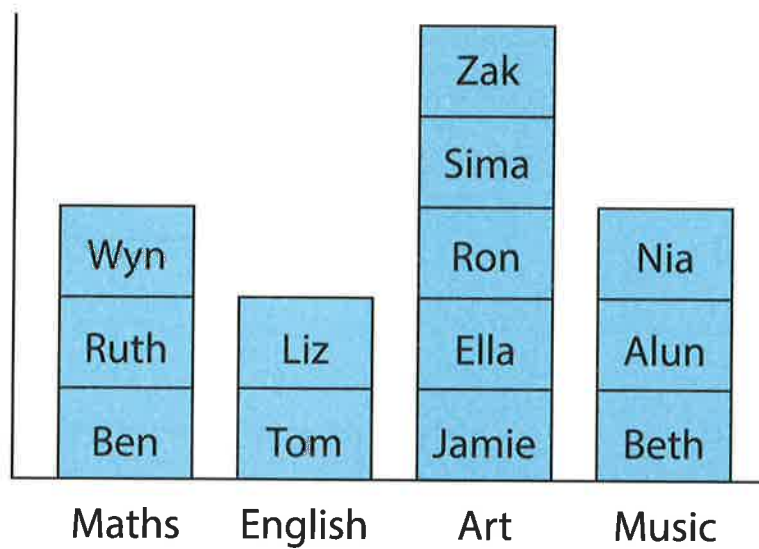
Sam eats 6 of these sweets.

How many sweets are left?

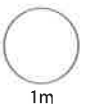
sweets

1m

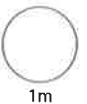
2 Some children choose their favourite subject.



How many choose **English**?



Which subject do **most** children choose?



3 Write in order.

54

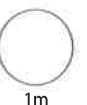
34

45

43

**smallest**

**largest**

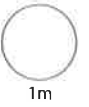


4 There are **6** legs on **one** ladybird.

How many legs on **two** ladybirds?



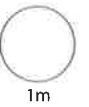
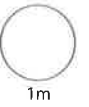
legs



5

$$36 + 5 =$$

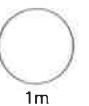

$$60 - 4 =$$



6 Look at the thermometer.

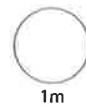
What is the temperature?

°C

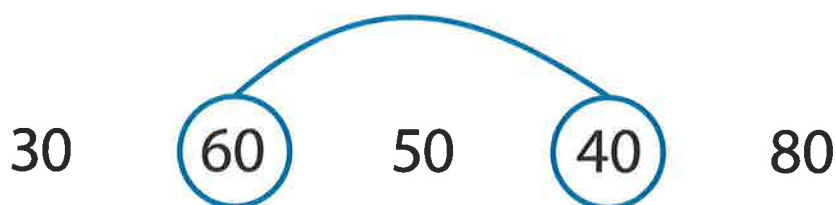


7 Count on in **tens**.

37 → 47 → 57 →  →

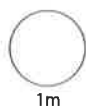


8 Two numbers are joined to make **100**



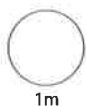
Join two of these numbers to make **100**

60      50      30      90      70



Now join two of these numbers to make **100**

45      85      55      25      65

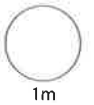


9 Tom has 18p.

Ella has **half** as much.

How much does Ella have?

p



10 Write the times on the 12-hour digital clocks.

The first is done for you.

6 o'clock

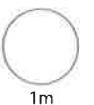
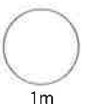
6:00

half past 9

:

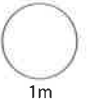
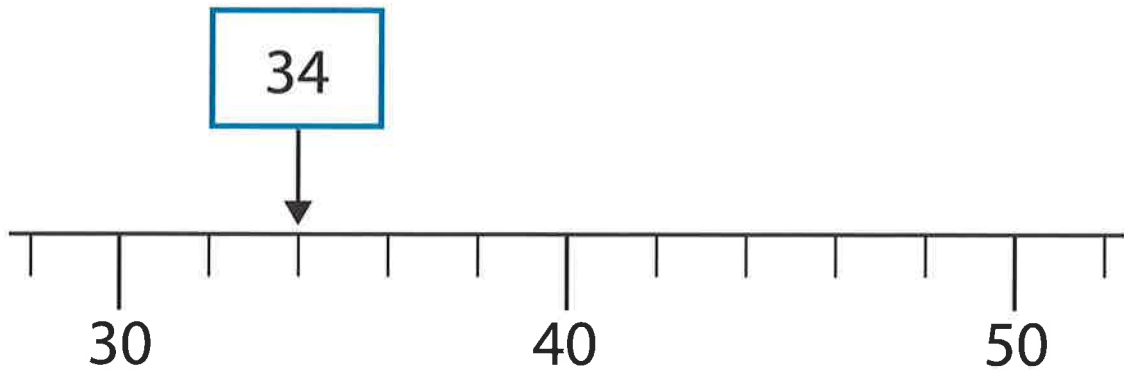
quarter to 8

:



11 The arrow points to 34

Draw an arrow ( $\downarrow$ ) that points to 48



12 Join cards that give the **same** answer.

$$15 - 11$$

$$17 - 9$$

$$19 - 14$$

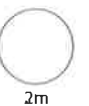
$$21 - 15$$

$$50 \div 10$$

$$2 \times 2$$

$$4 \times 2$$

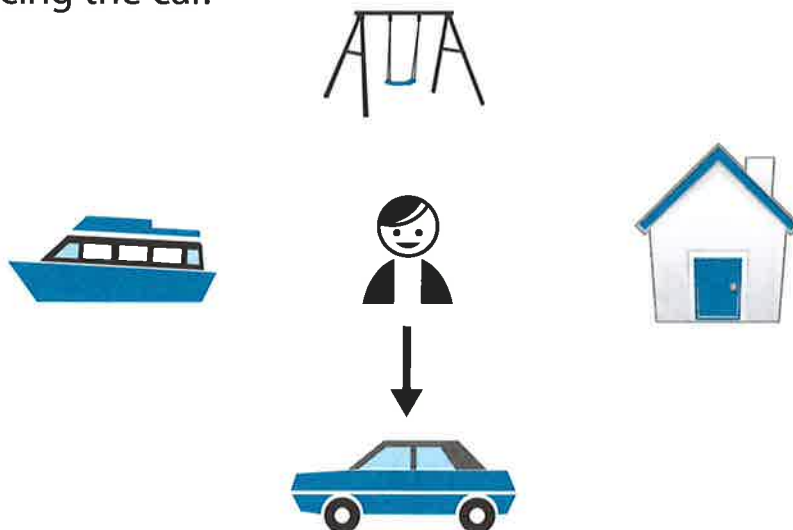
$$30 \div 5$$



TOTAL



13 Ben is facing the car.



He makes a **half turn**. What is Ben facing now?

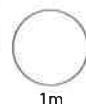
Circle your answer.

swing

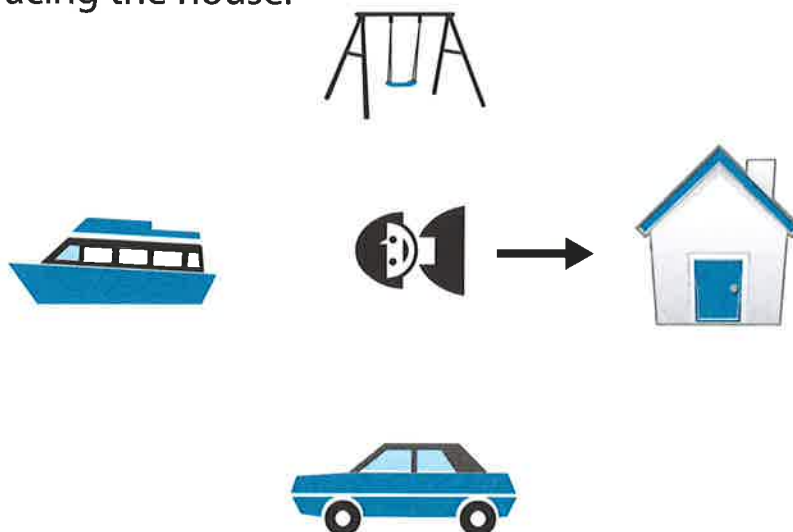
house

car

boat



Anna is facing the house.



She makes a **quarter turn clockwise**. What is Anna facing now?

Circle your answer.

swing

house

car

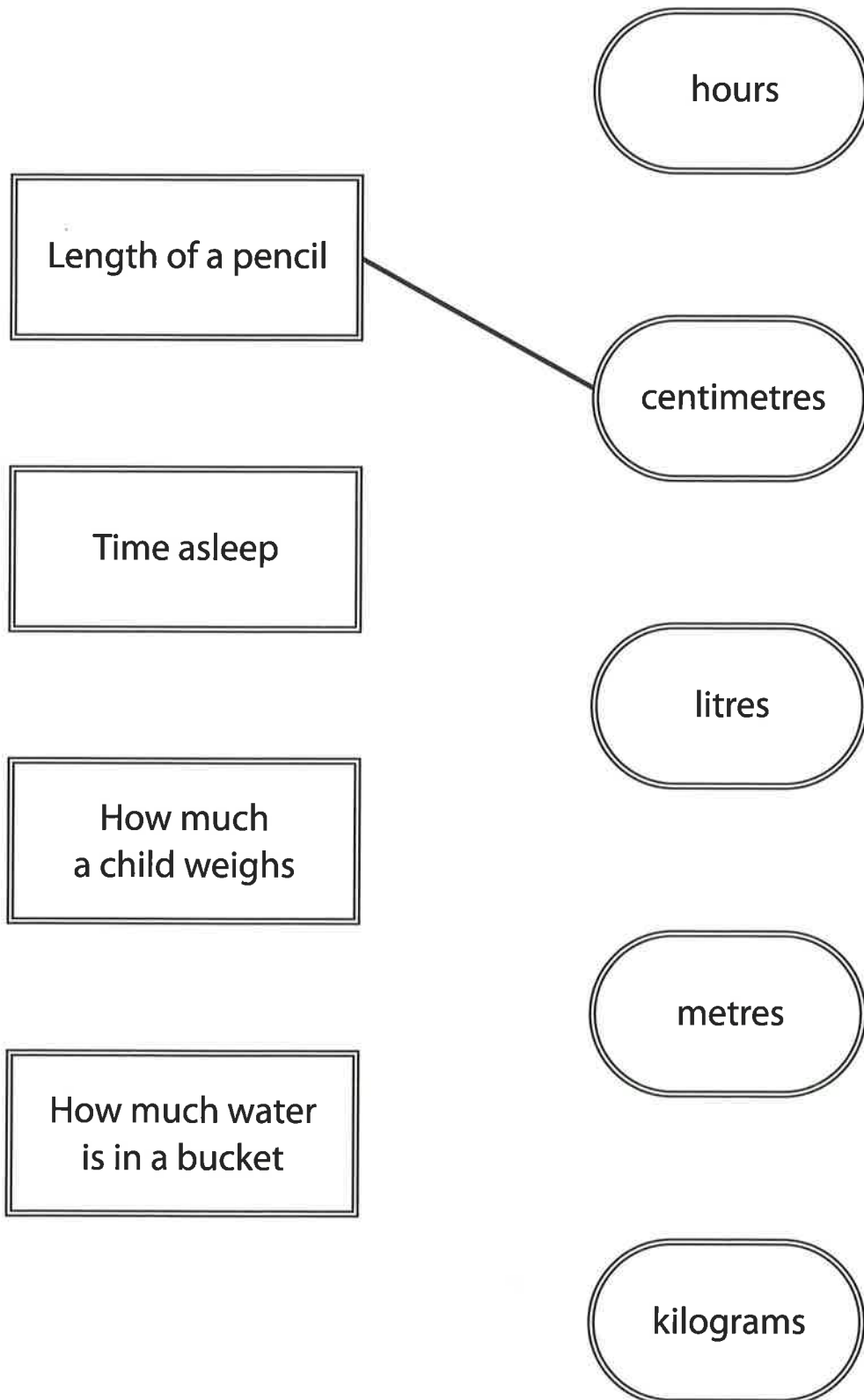
boat





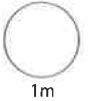
14 Show the **units** used to measure.

One is done for you.



15 Make this correct.

$$38 + 23 = \boxed{\phantom{00}} + 38$$



16



**Oranges**  
**30p each**



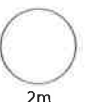
**Apples**  
**25p each**

Meg buys **two** oranges and **one** apple.

She pays with a **£1** coin.



How much change does Meg get?



- 17 4 children share this money **equally**.



How much does each child get?

p



18



Use two of these signs to make a number sentence.

$$55 \bigcirc 20 \bigcirc 35$$



Now use two of the signs to make a **different** number sentence.

$$55 \bigcirc 20 \bigcirc 35$$



TOTAL



© Crown copyright 2014